

Construire dans chaque cas un représentant du vecteur $\vec{u} + \vec{v}$ à partir du point M :

a.

Grid: A B C D E
1
2
3
4
5

b.

Grid: A B C D E
1
2
3
4
5

c.

Grid: A B C D E
1
2
3
4
5

d.

Grid: A B C D E
1
2
3
4
5

e.

Grid: A B C D E
1
2
3
4
5

f.

Grid: A B C D E
1
2
3
4
5

g.

Grid: A B C D E
1
2
3
4
5

h.

Grid: A B C D E
1
2
3
4
5

i.

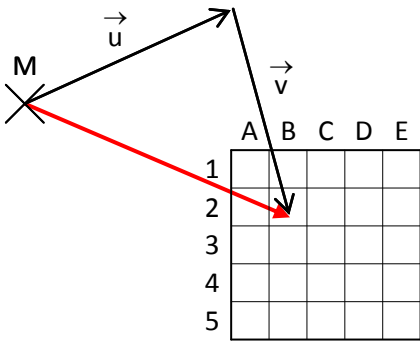
Grid: A B C D E
1
2
3
4
5

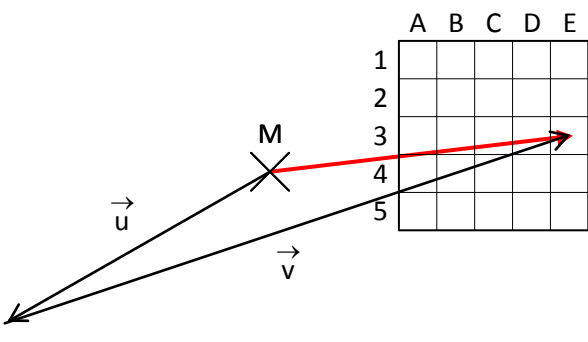
j.

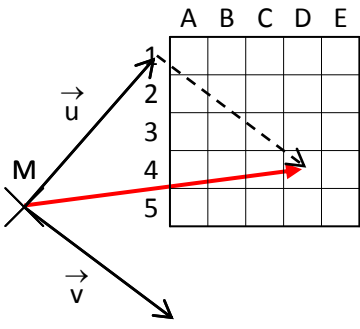
Grid: A B C D E
1
2
3
4
5

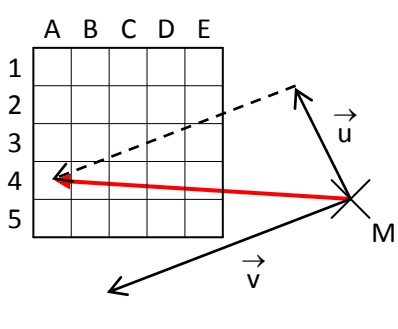
Construire dans chaque cas un représentant du vecteur $\vec{u} + \vec{v}$ à partir du point M :

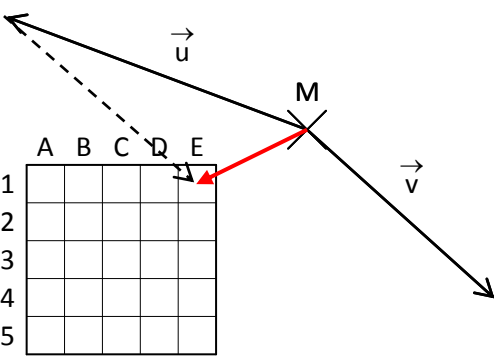
CORRIGE – M. QUET

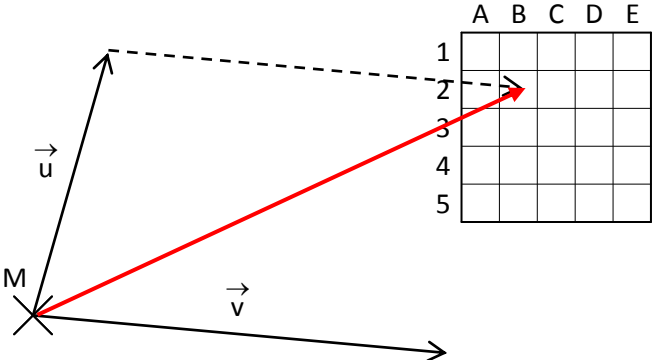
a. 

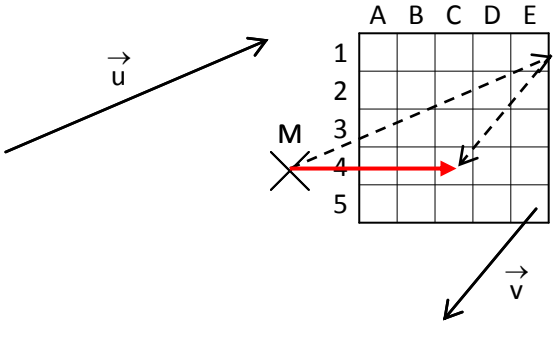
b. 

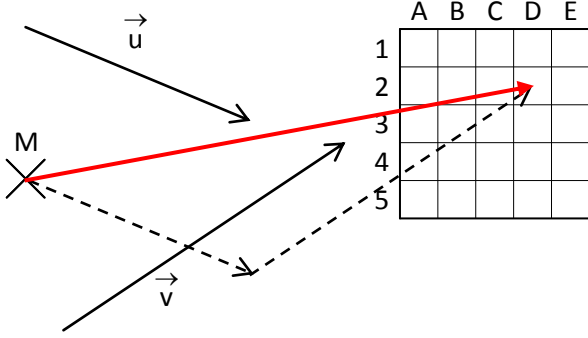
c. 

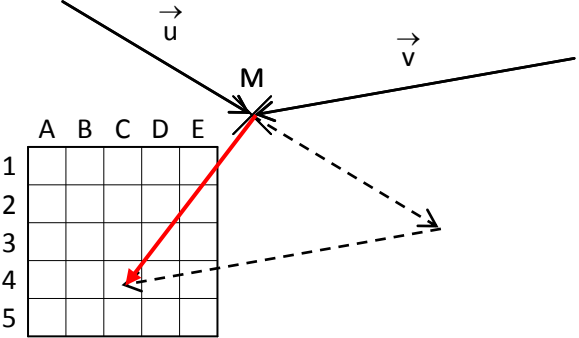
d. 

e. 

f. 

g. 

h. 

i. 

j. 