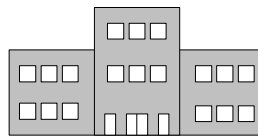

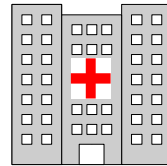
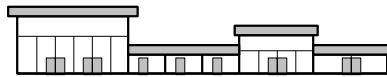
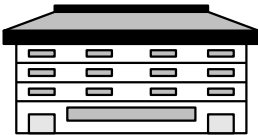


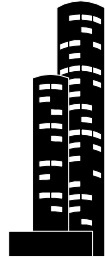



Exercice

Retrouver, pour chacun de ces dessins, le ou les axes de symétrie.



CORRIGE – M. QUET

Exercice 1

